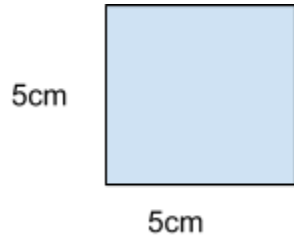
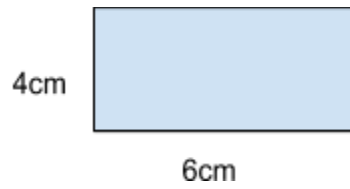


1. Find the perimeter of the following shapes. Remember to include the correct unit:

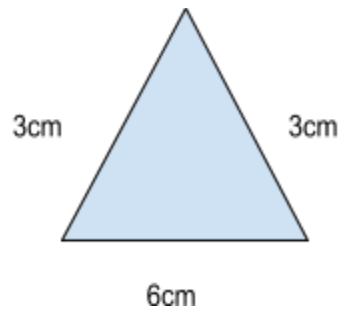
a)



b)



c)




2. Find the perimeter of the following shapes. Remember to include the correct unit:

a)



b)



c)